


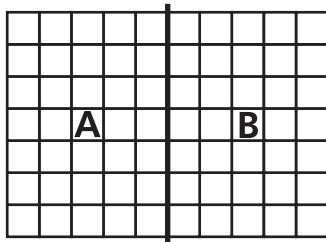
Write the correct answer.

- 1 Complete the number sentence to show the total number of squares in the array.



$26 + 12 +$ _____

For 2 and 3, use the array.




- 2 How many squares are in each part?

A: _____ B: _____

- 3 What multiplication sentence tells how many squares are in the entire array?


- 4 How many squares are there in all?



- 5 What multiplication sentence describes the array?



- 6 What multiplication sentence describes the array?



7 Write a number sentence that is part of the fact family for which 8 is the smallest number and 72 is the largest number.

8 Write the fact family for this story.

Josie collects stamps. She buys 8 new stamps every week. How long will it take her to collect 96 new stamps?


9 What fact family includes all the numbers for this story? Write the numbers in the fact family.

Enrico read 3 books each month. How long will it take him to read 33 books?

10 What fact family includes all the numbers for this story? Write the numbers in the fact family.

Ms. Brown buys 9 packages of pencils. She has a total of 36 pencils. How many pencils are in each package?

11 What multiplication sentence represents the entire array?



12 Celia is reading a 125-page book. She has the book open to two pages whose numbers have a sum of 141. What are the two page numbers?
