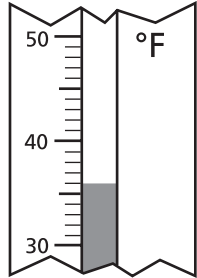
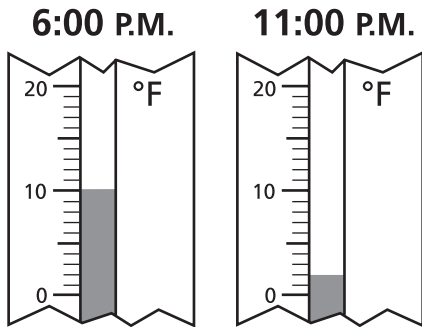


Write the correct answer.

- 1 What temperature is shown on the thermometer?




For 2 and 3, use the thermometers.




- 2 How much warmer was the temperature at 6:00 P.M. than at 11 P.M.?

- 3 How many degrees did the temperature decrease between 6:00 P.M. and 11:00 P.M.?

- 4 What time is shown on the clock?



- 5 What time is 2 hours 15 minutes earlier than the time shown on the clock?



- 6 Zak is mailing a package that weighs 2 pounds 7 ounces. How many ounces is the package?

- 7 Mindy picked 54 ounces of apples. How many pounds and ounces of apples did she pick?

For 8 and 9, use this information.

Glenn's family is having breakfast. There is a 72-ounce container of juice on the table.

- 8 How many 1-quart pitchers can Glenn fill with juice?

- 9 Glenn pours a 6-ounce glass of juice for himself and for 4 others. How many ounces are left?

- 10 Kaylee has a 96 fl oz of milk left in a 1-gallon container. How many cups of milk did she drink?

- 11 Lamar made 47 fl oz of lemonade. How many fluid ounces more than a quart did he make?

- 12 Luis woke up at 7:30 A.M. It took him 40 minutes to get ready for work. It took him 6 minutes to walk 3 blocks to the bus stop. He rode the bus for 25 minutes. When he got off the bus, it took him 16 minutes to walk to work. At what time did Luis get to work?
