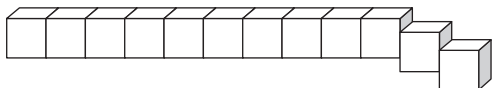


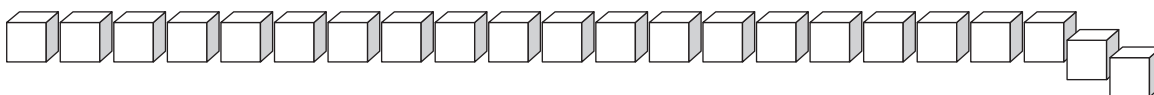
Counting and Larger Numbers

Each train is made from cubes. Suppose you want to count the cubes as fast as you can. What strategy could you use to quickly count all the cubes?

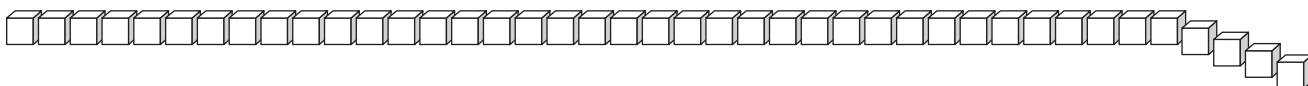
1



2



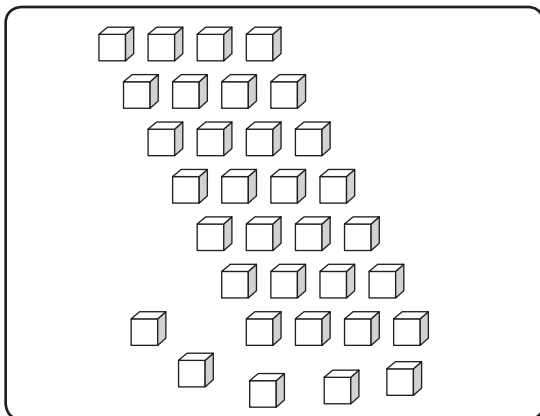
3



How could you use place value to find which group has the larger number of cubes?

4

A



B

