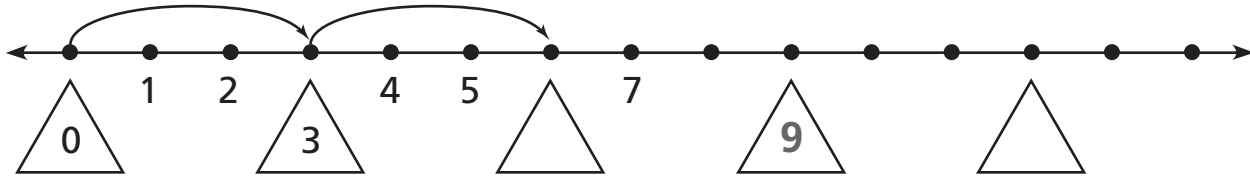
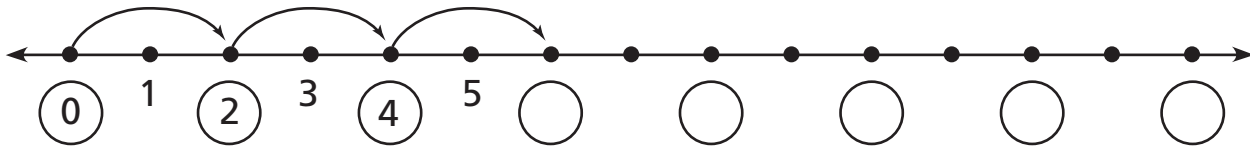
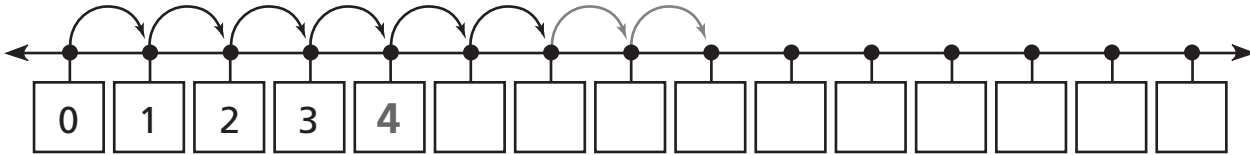


# Counting on a Number Line

Use the number lines from Problems 1 to 4 on LAB page 7 to answer the questions.



**1** The number zero had a tag on every number line in Problems 1 to 3. Which other numbers had tags on all three number lines?

\_\_\_\_\_

**2** What is the next number that would be tagged on every number line in Problems 1 to 3, if the number lines continued?

\_\_\_\_\_

**3** What is the first number that would be tagged on every number line in Problems 1 to 4, if the number lines continued?

\_\_\_\_\_