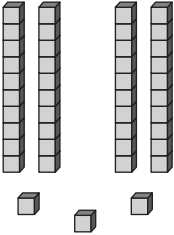
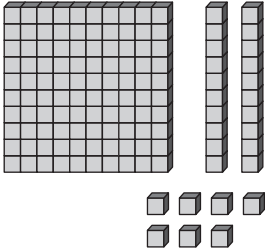
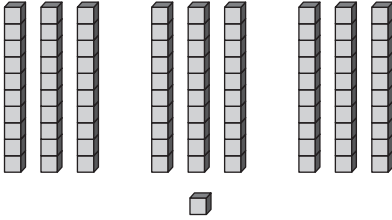


# Regrouping with Base-Ten Blocks

Write the number that matches the group of base-ten blocks.

<p><b>1</b></p>  <p style="text-align: center;">□</p>	<p><b>2</b></p>  <p style="text-align: center;">□</p>	<p><b>3</b></p>  <p style="text-align: center;">□</p>
--	--	---

**4** If you combine the three groups above, how many blocks are used?

□ flat, □ rods, □ units

**5** Write the same amount using the fewest blocks.

□ flats, □ rods, □ unit