


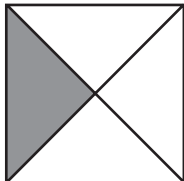
Recording Rules with Fractions

1 Complete the Find a Rule cards. Shade the pictures to match the numbers.


A

FRONT	BACK	
	Rule A	Rule B
	$\frac{4}{5}$	$\frac{1}{5}$

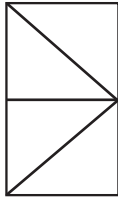
B

FRONT	BACK	
	Rule A	Rule B
	$\frac{1}{4}$	$\frac{3}{4}$

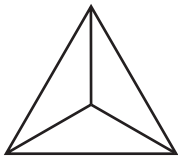
C

FRONT	BACK	
	Rule A	Rule B
	$\frac{1}{6}$	$\frac{5}{6}$

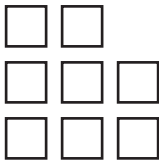
D

FRONT	BACK	
	Rule A	Rule B
	$\frac{2}{4}$	$\frac{2}{4}$

E

FRONT	BACK	
	Rule A	Rule B
	$\frac{0}{3}$	$\frac{3}{3}$

F

FRONT	BACK	
	Rule A	Rule B
	$\frac{5}{8}$	$\frac{3}{8}$

2 If you know that the amount for Rule A is $\frac{2}{5}$, how can you figure out the amount for Rule B?
