
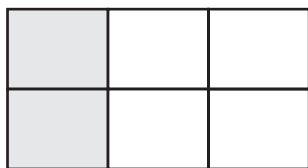
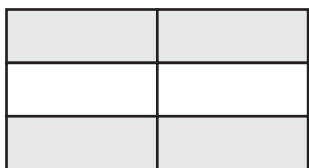
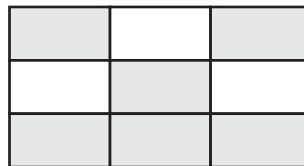
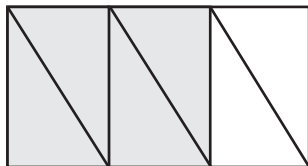
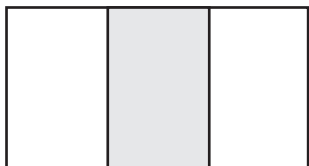


# Making Equivalent Fractions

1 Circle the pictures that have  $\frac{2}{3}$  shaded.



2 Circle the pictures that have  $\frac{2}{4}$  shaded.

