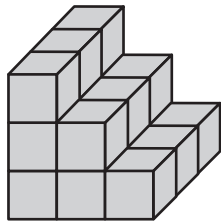


Measuring Volume


Each problem shows a picture of a model made from centimeter cubes. Build the model and find its volume.

1



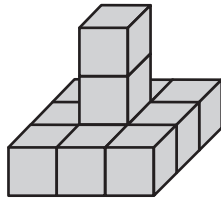
volume: _____ cubic cm

2




volume: _____ cubic cm

3



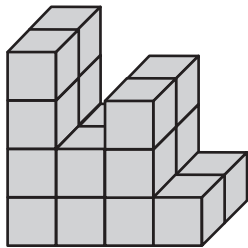
volume: _____ cubic cm

4



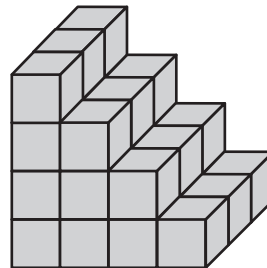
volume: _____ cubic cm

5



volume: _____ cubic cm

6



volume: _____ cubic cm