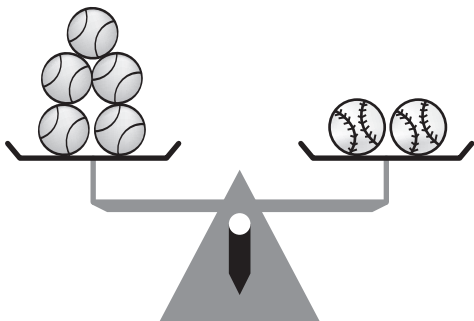

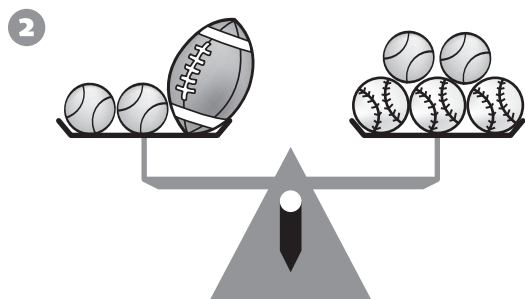



Weight in Ounces, Pounds, and Tons


1 A tennis ball  weighs 2 oz.




How much does a
baseball  weigh?



How much does a
football  weigh?



How much does a
basketball  weigh?

4 How many tennis balls would it take
to balance a basketball?

5 The maximum weight for a bowling ball
is 4 tennis balls less than 12 basketballs.
What is the maximum weight for a
bowling ball?
