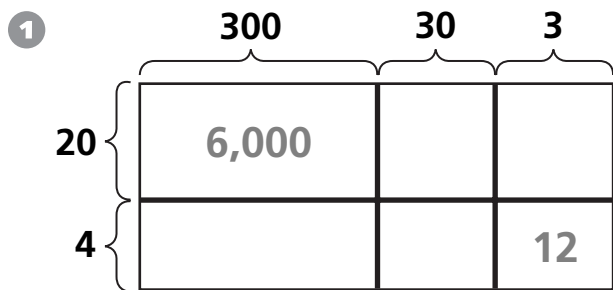
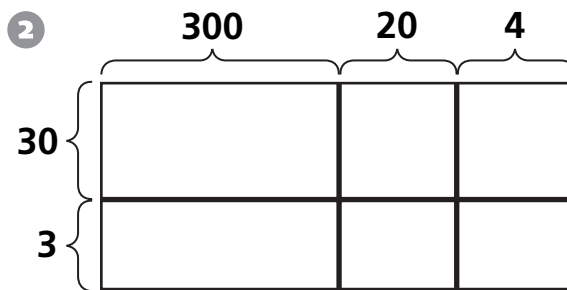


# Multiplying Three-Digit Numbers

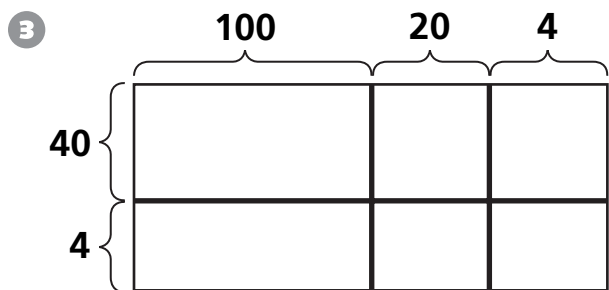
Use the diagram to help you find the product.



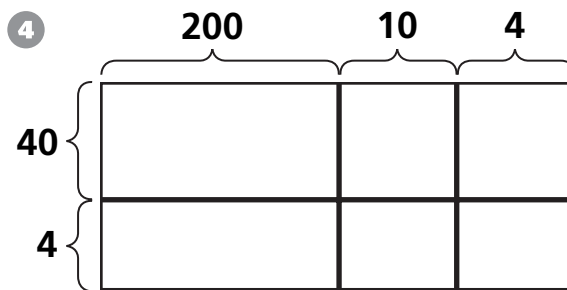
$333 \times 24 = \underline{\hspace{2cm}}$



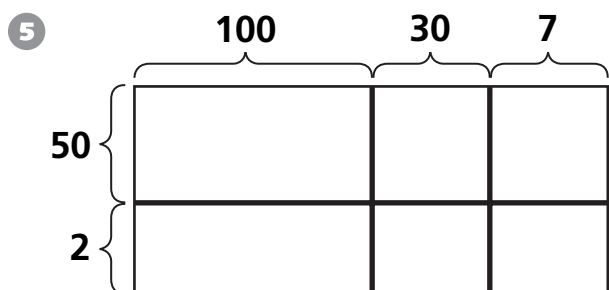
$324 \times 33 = \underline{\hspace{2cm}}$



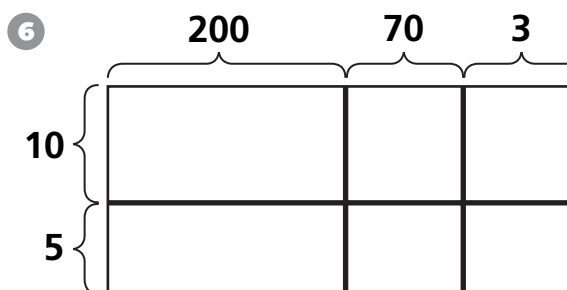
$44 \times 124 = \underline{\hspace{2cm}}$



$44 \times 214 = \underline{\hspace{2cm}}$



$137 \times 52 = \underline{\hspace{2cm}}$



$15 \times 273 = \underline{\hspace{2cm}}$

© Education Development Center, Inc.