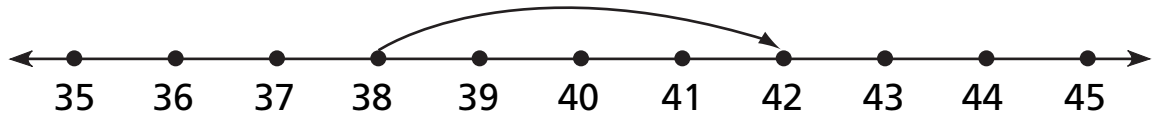


# Adding on the Number Line

NCTM Standards 1, 2, 6, 9, 10

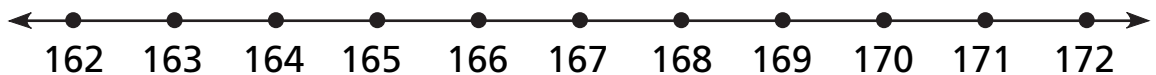
Use the number line to complete the addition sentence. Show each jump on the number line

- 1 Start at 38 and jump to 42. How many spaces did you jump?



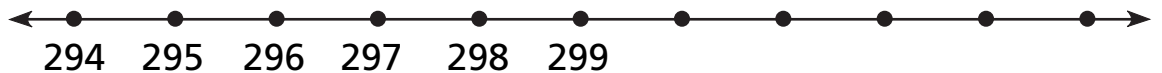
$$38 + \underline{\quad} = 42$$

- 2 Tara jumped 3 spaces forward and landed at 172. Where did she start?



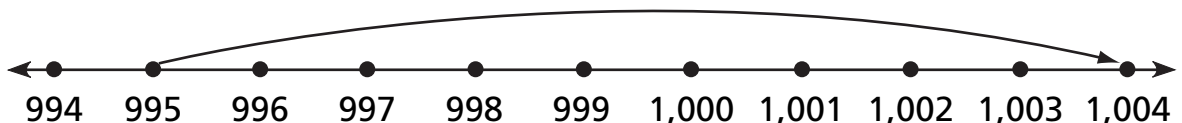
$$\underline{\quad} + 3 = 172$$

- 3 Sam started at 296 and jumped 6 spaces forward. Where did he land?



$$296 + \underline{\quad} = \underline{\quad}$$

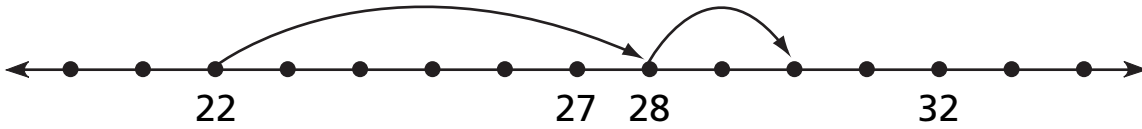
- 4 Write a problem to match the number sentence.



$$995 + \underline{\quad} = 1,004$$

Use the number line to complete the number sentences.

5



$$22 + \underline{\quad} = 28$$

$$28 + 2 = \underline{\quad}$$

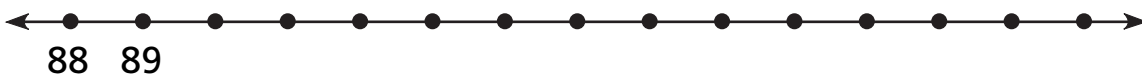
6



$$\underline{\quad} + 2 = 77$$

$$77 + 5 = \underline{\quad}$$

7

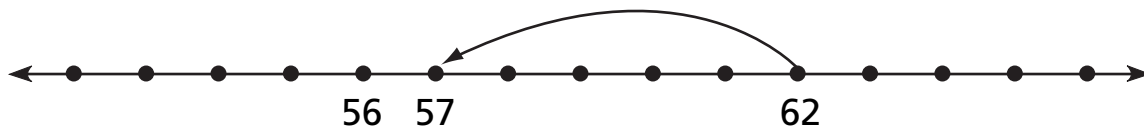


$$91 + \underline{\quad} = 99$$

$$99 + 1 = \underline{\quad}$$

### Challenge

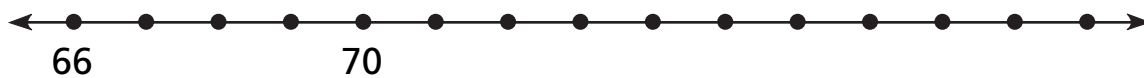
8



$$62 - \underline{\quad} = 57$$

$$\underline{\quad} - 4 = 52$$

9



$$\underline{\quad} - 7 = 68$$

$$\underline{\quad} - 10 = 69$$