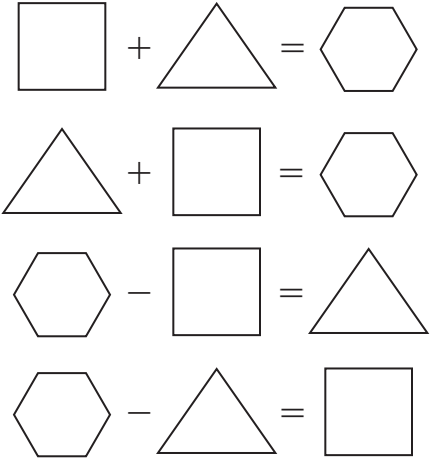
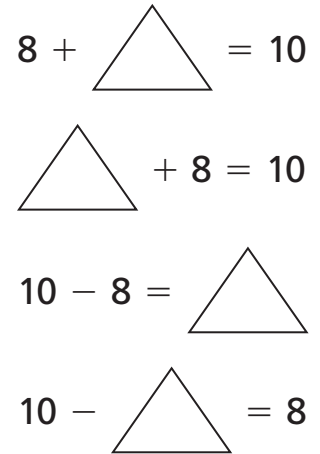


Complete the fact family to match the story.

- 1 Kofi walks **10 blocks** to school. If he has already walked **7 blocks**, how many more blocks does Kofi have to walk? [Lessons 1 and 2](#)



- 2 Write a story to match the fact family. [Lesson 2](#)

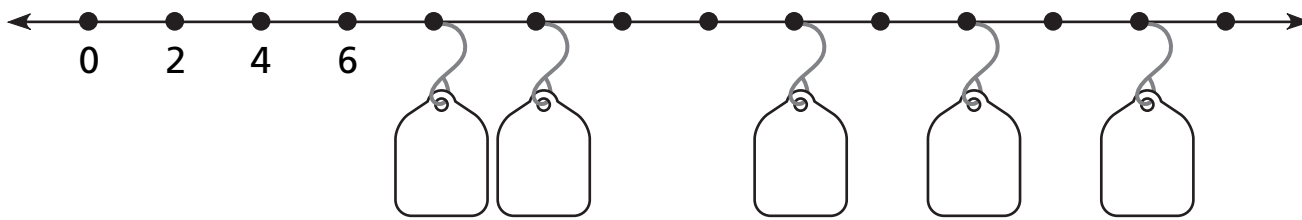


Fill in the missing sums. [Lesson 3](#)

3

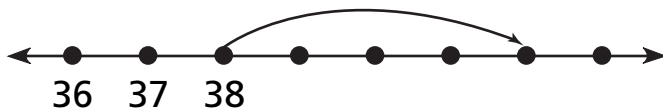
4

5 Find the missing number for each tag. *Lessons 4 and 7*



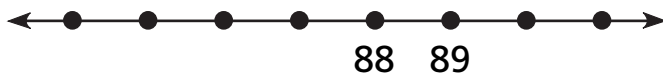
Use the number line to complete the number sentence. *Lessons 5 and 6*

6



$$\boxed{38} + \boxed{4} = \boxed{}$$

7



$$\boxed{90} - \boxed{4} = \boxed{}$$

Write the missing operation sign. *Lesson 8*

8 $12 \bigcirc 3 = 9$

9 $14 \bigcirc 8 = 6$

10 $9 \bigcirc 6 = 15$

11 $7 \bigcirc 3 = 10$

12 Don and Frank went fishing. Together they caught 5 fish. What are all the numbers of fish each boy might have caught? *Lesson 9*

Don						
Frank						