

# Rounding to the Nearest Ten or Hundred

NCTM Standards 1, 6, 7, 10

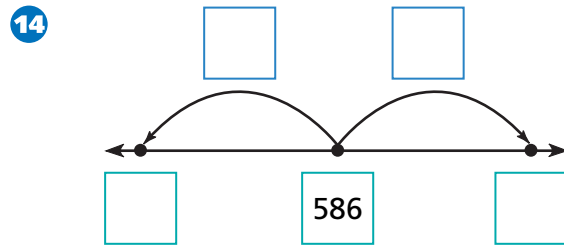
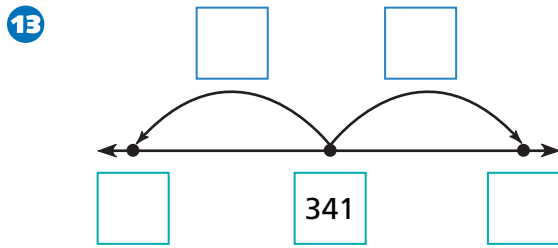
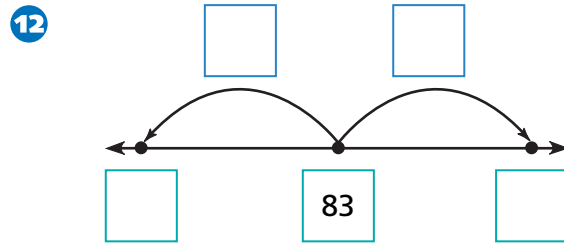
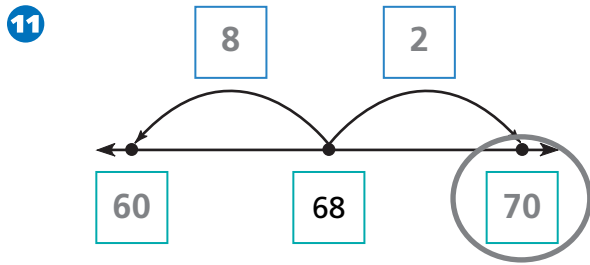
**Label the multiples of 10 that surround each number. Circle the nearest multiple of 10.**

<p><b>1</b></p> <p>50      52      <input type="text"/></p>	<p><b>2</b></p> <p><input type="text"/>      43      <input type="text"/></p>
<p><b>3</b></p> <p><input type="text"/>      37      <input type="text"/></p>	<p><b>4</b></p> <p><input type="text"/>      43      <input type="text"/></p>
<p><b>5</b></p> <p><input type="text"/>      234      240</p>	<p><b>6</b></p> <p><input type="text"/>      43      <input type="text"/></p>
<p><b>7</b></p> <p><input type="text"/>      151      <input type="text"/></p>	<p><b>8</b></p> <p><input type="text"/>      108      <input type="text"/></p>

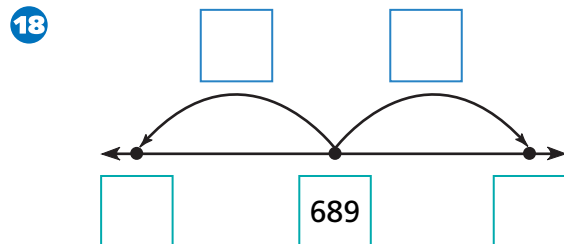
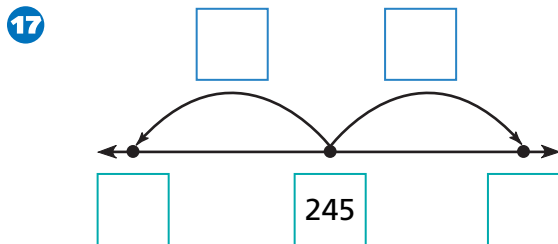
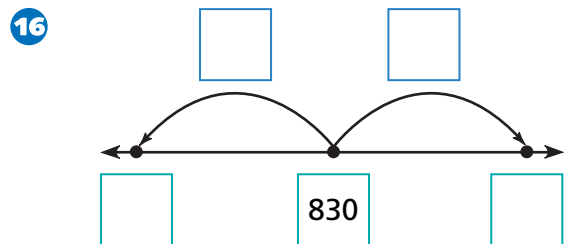
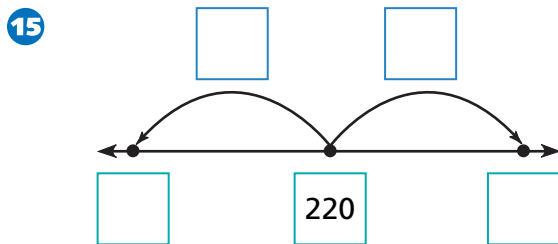
**Label the multiples of 100 that surround each number. Circle the nearest multiple of 100.**

<p><b>9</b></p> <p><input type="text"/>      234      300</p>	<p><b>10</b></p> <p><input type="text"/>      43      <input type="text"/></p>
---	--

Label the multiples of 10 that surround each number. In the boxes above the number lines, write the distance from the number to each multiple of 10. Circle the nearest multiple of 10.



Label the multiples of 100 that surround each number. In the boxes above the number lines, write the distance from the number to each multiple of 100. Circle the nearest multiple of 100.



**19 Challenge** Round each number to the nearest ten.

67

6,789

678

67,891