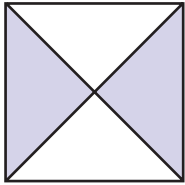


Recording Rules with Fractions

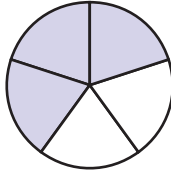
NCTM Standards 1, 2, 6, 7, 8, 9, 10

1 Complete this set of Find a Rule cards.

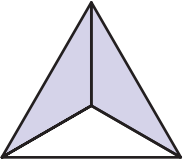
A

FRONT	BACK	
	Rule A $\frac{2}{4}$	Rule B $\frac{2}{4}$

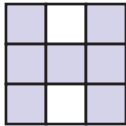
B

FRONT	BACK	
	Rule A _____	Rule B $\frac{2}{5}$

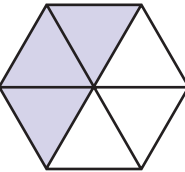
C

FRONT	BACK	
	$\frac{2}{3}$	_____

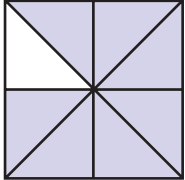
D

FRONT	BACK	
	_____	_____

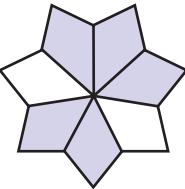
E

FRONT	BACK	
	_____	_____

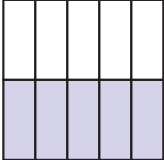
F

FRONT	BACK	
	$\frac{4}{8}$	$\frac{1}{2}$

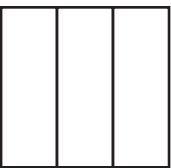
G

FRONT	BACK	
	$\frac{3}{5}$	$\frac{3}{5}$

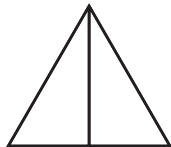
H

FRONT	BACK	
	_____	_____

I


FRONT	BACK	
	$\frac{1}{3}$	$\frac{2}{3}$

J

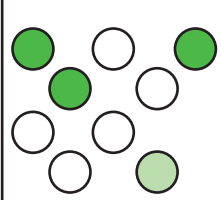
FRONT	BACK	
	$\frac{1}{2}$	$\frac{0}{2}$

2 Complete this set of Find a Rule cards.

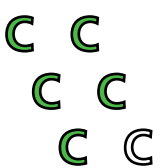
A

FRONT	BACK	
	Rule C $\frac{3}{10}$	Rule D $\frac{5}{10}$


B

FRONT	BACK	
	Rule C $\frac{5}{9}$	Rule D $\frac{3}{9}$

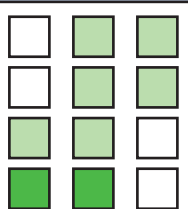
C

FRONT	BACK	
	$\frac{1}{6}$	$\frac{5}{6}$

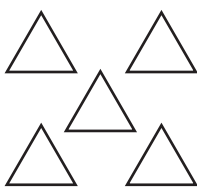
D

FRONT	BACK	
	$\frac{2}{4}$	_____

E

FRONT	BACK	
	_____	$\frac{2}{5}$

F

FRONT	BACK	
	$\frac{3}{5}$	$\frac{2}{5}$



3 How are the sets of FAR cards on pages 117 and 118 different?

4 **Challenge** Complete this set of Find a Rule cards.

FRONT	BACK
$\frac{1}{3}$	$\frac{2}{3}$

FRONT	BACK
$\frac{1}{4}$	$\frac{3}{4}$

FRONT	BACK
$\frac{3}{5}$	$\frac{2}{5}$

FRONT	BACK
$\frac{4}{6}$	