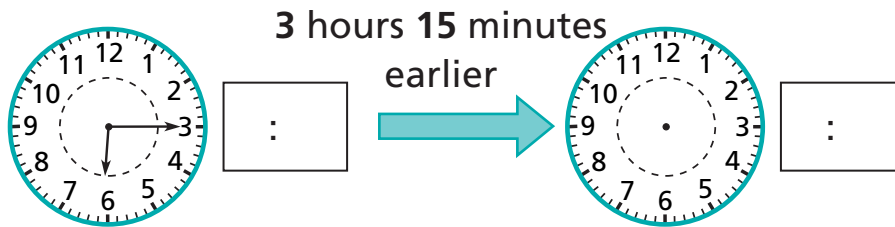


# Comparing Times

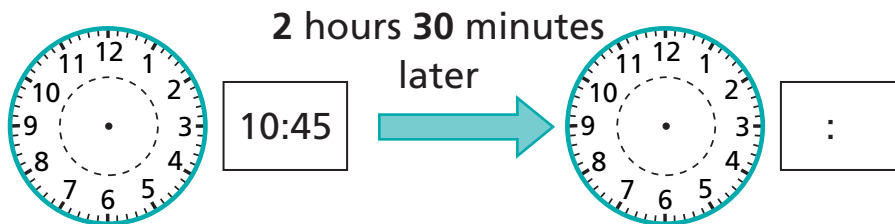
NCTM Standards 1, 4, 6, 7, 8, 9, 10

Write the missing time and draw the clock hands.

1

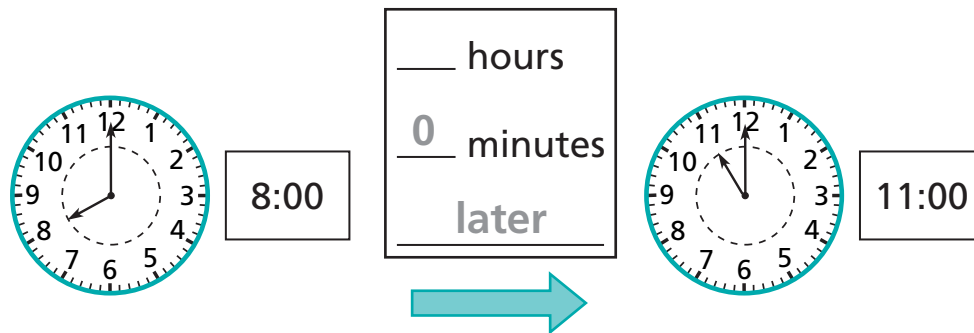


2

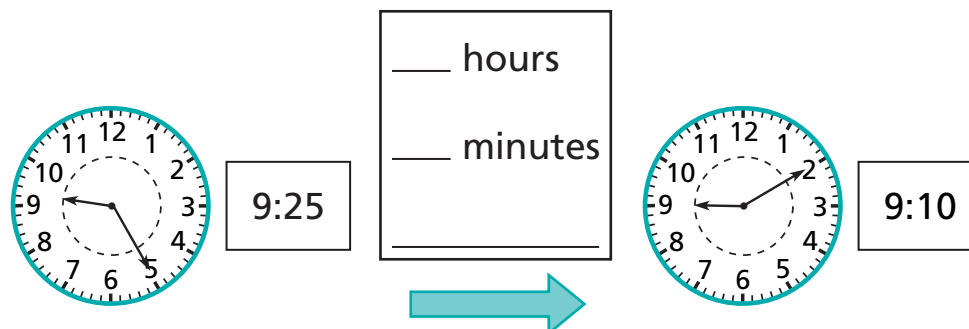


For the pair of clocks, write the missing numbers and words above the arrow.

3



4



**Fill in the missing times, clock hands, words, and numbers.**

5

6 At 12:30 Mark said, "I've been cleaning my room for 1 hour and 45 minutes." What time did Mark start cleaning?

\_\_\_ : \_\_\_

**7 Challenge** Fill in the missing word, numbers, clock hands, and times.