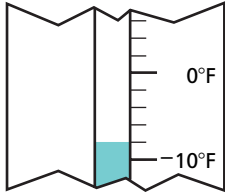


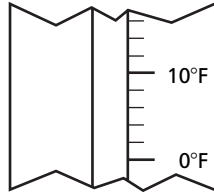
Shade the thermometer or write the temperature. Lesson 1

1 Monday



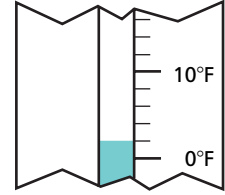
°F

2 Tuesday



6 °F

3 Wednesday



°F

Use the thermometers above to answer the questions. Lesson 8


4 Which day was the warmest? _____

5 Which day was the coldest? _____

6 How many degrees did the temperature decrease from Tuesday to Wednesday? _____

For each pair of clocks, fill in the missing times and hands. Lessons 2 and 3

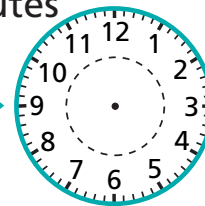
7



:

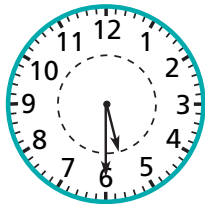
2 hours 30 minutes

earlier



: 10:45

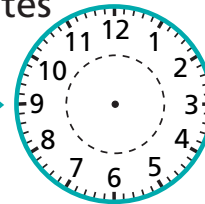
8



:

1 hour 45 minutes

later



:

9 Complete the table. *Lessons 4 and 5*

WEIGHT OF 1 DOZEN EGGS		
Bird	Ounces	Pounds and Ounces
Quail	4 oz	_____ lb, _____ oz
Chicken	_____ oz	1 lb, 5 oz
Turkey	29 oz	_____ lb, _____ oz
Goose	_____ oz	3 lb, 12 oz

Shana had **50 fl oz** of lemonade. *Lessons 6 and 7*

10 She could fill _____ one-cup measure(s) and have _____ fl oz left over.

11 She could fill _____ pint glass(es) and have _____ fl oz left over.

12 She could fill _____ one-quart pitcher(s) and have _____ fl oz left over.

13 How much more lemonade would Shana need to have a half gallon? _____

14 Latoya left school at 3:30 P.M. She walked 4 blocks to the library in 8 minutes. She spent 30 minutes in the library. Then she walked 6 blocks to her house. At what time did Latoya get to her house? Explain. *Lesson 9*
