

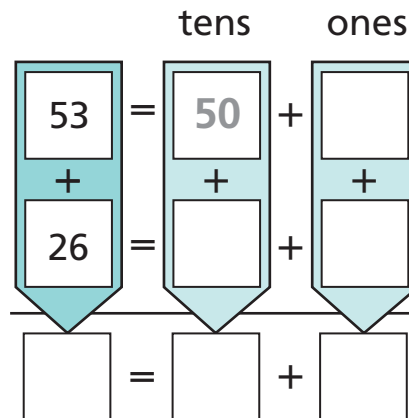
Breaking Up Numbers to Add

NCTM Standards 1, 2, 6, 8, 9, 10

Find the sum. Break up the numbers before you add. HINT: You do not have to fill in all the boxes.

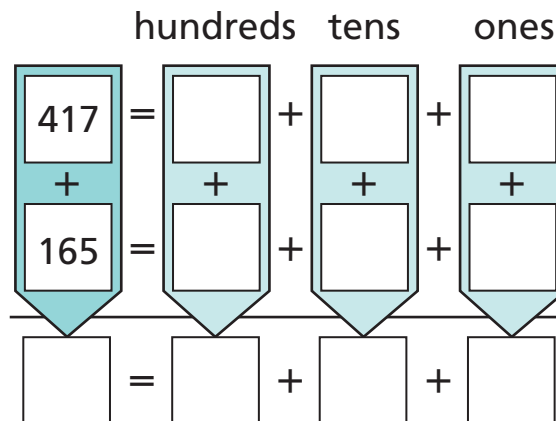
1

$$\begin{array}{r} 53 \\ + 26 \\ \hline \end{array}$$



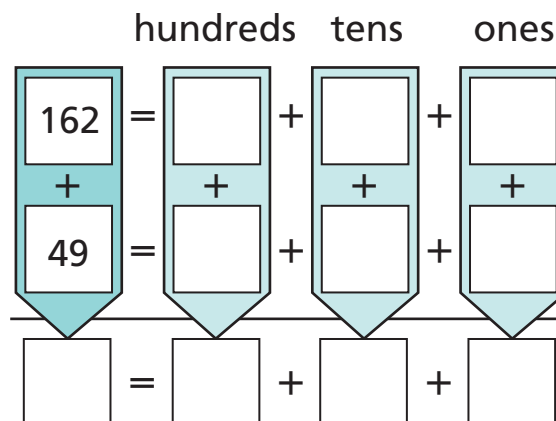
2

$$\begin{array}{r} 417 \\ + 165 \\ \hline \end{array}$$



3

$$\begin{array}{r} 162 \\ + 49 \\ \hline \end{array}$$



Find the sum. If it helps, break up the numbers before you add.

4 $125 + 27 = \square$

5 $15 + 339 = \square$

6 $107 + 209 = \square$

7 $226 + 394 = \square$

8 $272 + 29 = \square$

9 $608 + 195 = \square$



10 Challenge Make up an addition number story and have someone else solve it. Make an answer key with a complete number sentence that goes with the story.
