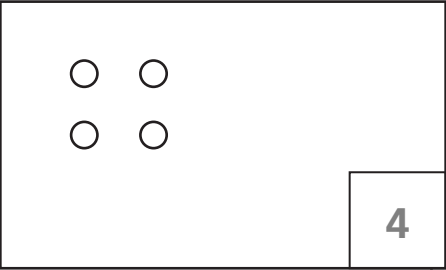
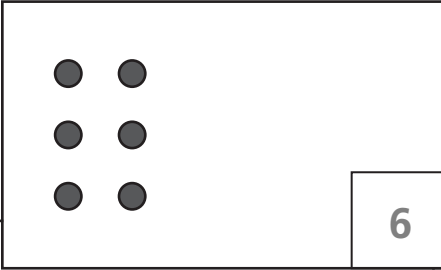
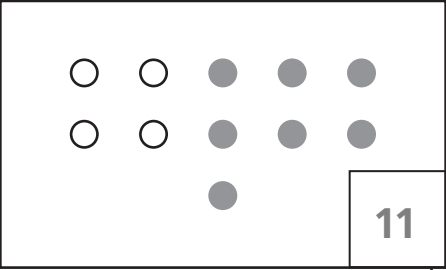
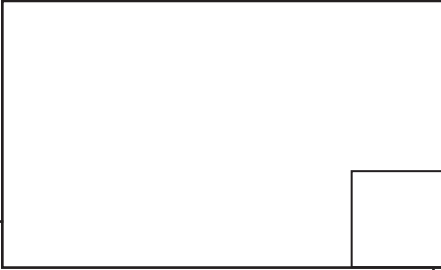




Counting and Larger Numbers

1 Complete the pictures and fill in the missing numbers.

	<p>total dots</p>		<p>total dots</p>
<div style="border: 1px solid black; padding: 2px; display: inline-block;">4</div>	<p>→</p>	<div style="border: 1px solid black; padding: 2px; display: inline-block;">10</div>	<p>←</p>
<p>Copy these dots below. Then draw 7 more dots.</p>		<p>Copy these dots below. Then draw 3 more dots.</p>	
	<p>total dots</p>		<p>total dots</p>
<div style="border: 1px solid black; padding: 2px; display: inline-block;">11</div>	<p>→</p>	<div style="border: 1px solid black; width: 40px; height: 20px; display: inline-block;"></div>	<p>←</p>
<p>Copy these dots below. Then draw 2 more dots.</p>		<p>Copy these dots below. Then draw 8 more dots.</p>	
	<p>total dots</p>		<p>total dots</p>
<div style="border: 1px solid black; width: 40px; height: 20px; display: inline-block;"></div>	<p>→</p>	<div style="border: 1px solid black; width: 40px; height: 20px; display: inline-block;"></div>	<p>←</p>



Test Prep

2 Last weekend Kanji sold lemonade in front of his house. He sold 5 glasses on Friday, 15 glasses on Saturday, and 8 glasses on Sunday. How many glasses did he sell during the 3 days?

- | | |
|-------|-------|
| A. 18 | C. 28 |
| B. 21 | D. 31 |