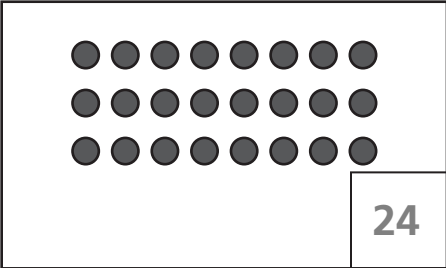

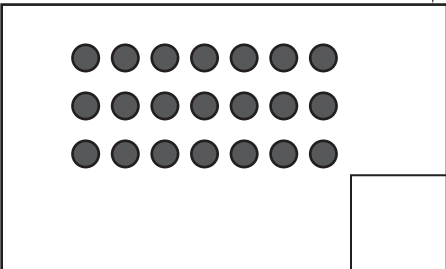


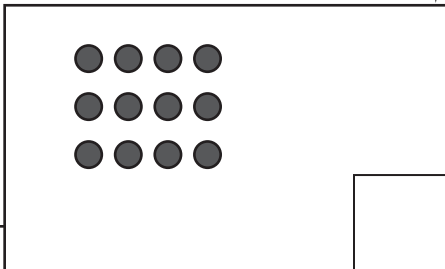


Counting on a Number Line

1 Complete the pictures and write the numbers.

	<p>total dots</p> <div style="border: 1px solid black; padding: 5px; display: inline-block;">48</div>	
<p>Draw 3 fewer dots in the frame below.</p>		<p>Draw 6 fewer dots in the frame below.</p>
	<p>total dots</p> <div style="border: 1px solid black; padding: 5px; display: inline-block;"> </div>	
<p>Draw 3 fewer dots in the frame below.</p>		<p>Draw 6 fewer dots in the frame below.</p>
	<p>total dots</p> <div style="border: 1px solid black; padding: 5px; display: inline-block;"> </div>	



Test Prep

2 Starr was born in 1962. When she was 20 years old, she decided to go to college. She started her own business 5 years later. Explain how to find out what year Starr started her business.
