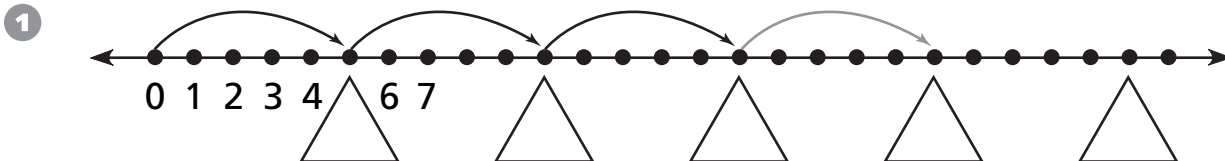


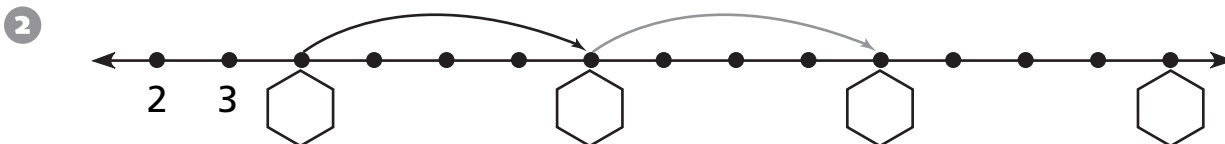
Adding on the Number Line

Use the number line to complete the addition sentences.



$$5 + \square = 10$$

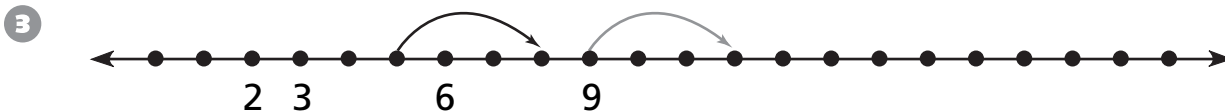
$$15 + 10 = \square$$



$$4 + 4 = \square$$

$$8 + 4 = \square$$

$$12 + 4 = \square$$



$$\square + 3 = 8$$

$$9 + \square = 12$$

$$13 + 3 = \square$$



Test Prep

- 4 Mr. Li is bringing orange slices for the 14 boys on his soccer team. If each boy gets 2 slices and each whole orange is cut into 4 slices, how many oranges does Mr. Li need?

- A. 7 C. 14
B. 10 D. 28