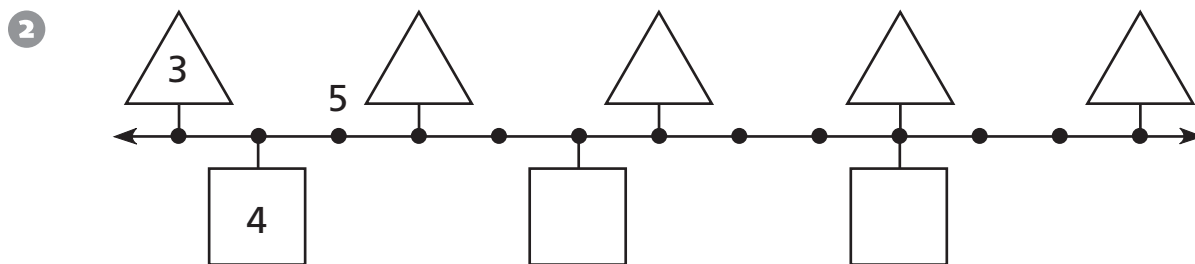
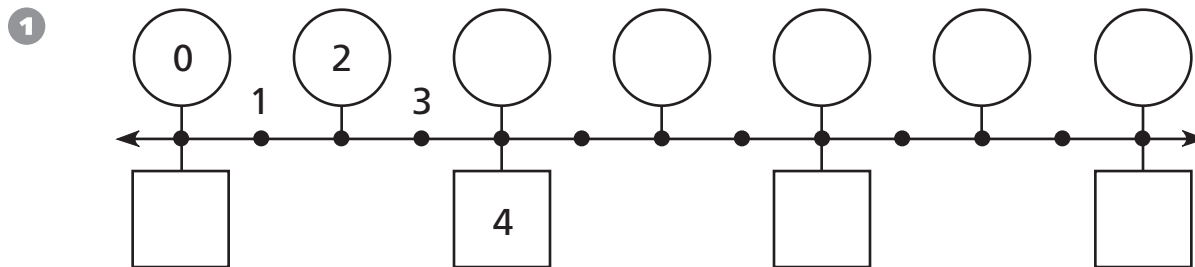



# Skip-Counting

Write the missing numbers in the shapes.



Fill in the missing numbers in the pattern.



## Test Prep

4 Charlotte is thinking of a number. It is a multiple of 2 and a multiple of 3. It is larger than 5 and smaller than 20. What is the largest number she could be thinking of? Explain how you found your answer.

---



---



---



---