




# Intersecting Lines

1 Use the maps to complete the table.

<b>A</b>	<b>B</b>	<b>C</b>
		

	A	B	C
Horizontal —			
Vertical			
Intersections +			

2 Use the information in the table to draw the maps and fill in the missing numbers in the table.

	A	B	C
Horizontal —	2		3
Vertical		5	
Intersections +	6	15	9

<b>A</b>	<b>B</b>	<b>C</b>



## Test Prep

3 There are 50 empty milk cartons in the art room, and 32 students. If each student takes one milk carton to make a bird feeder, how many cartons will be left over?

- A. 9
- B. 18
- C. 28
- D. 82

4 Manny has 2 dimes and 1 penny in his pocket. How many more pennies does he need to make 25¢?

- A. 1 more penny
- B. 2 more pennies
- C. 3 more pennies
- D. 4 more pennies