




Visualizing Intersections

1 Use the maps to complete the table.

A 	B 	C 
---	---	---

	A	B	C
Horizontal —			
Vertical			
Intersections +			

2 Use the information in the table to draw the maps and fill in the missing numbers in the table.

	A	B	C
Horizontal —	4		9
Vertical		3	
Intersections +	12	18	27

A	B	C
----------	----------	----------



Test Prep

3 Kimberly put a pencil on her desk. The pencil was 8 inches long. About how long is the length of Kimberly's desk?

- A. 8 inches
- B. 16 inches
- C. 24 inches
- D. 32 inches

