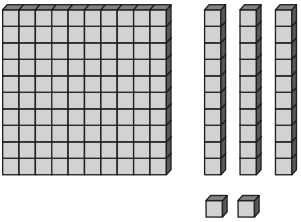
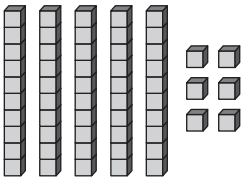


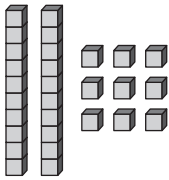
Regrouping with Base-Ten Blocks

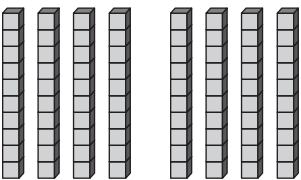
Write the number that matches the group of base-ten blocks.

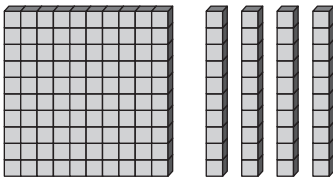
1 

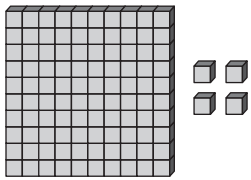
132

2 

3 

4 

5 

6 



Test Prep

- 7** Tom has been saving his allowance for a month. If he continues to save the same amount each week, what will his total savings be by **week 4**?

	Week 1	Week 2	Week 3	Week 4
Total Saved	\$2.25	\$4.50	\$6.75	■

- A. \$3.50
- B. \$5.50
- C. \$8.50
- D. \$9.00