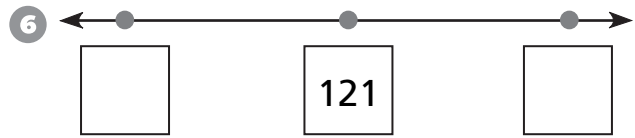
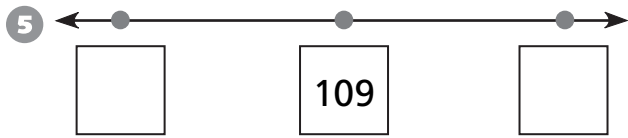
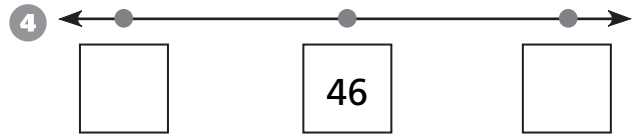
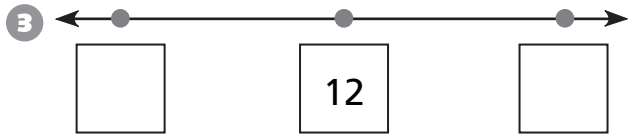
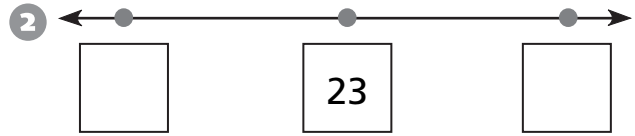
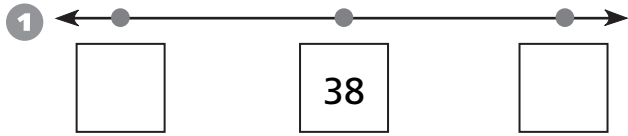
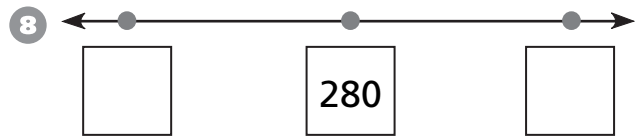
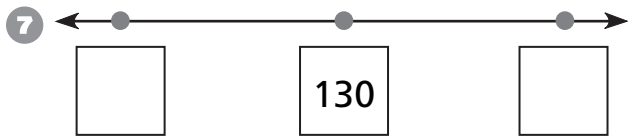


Rounding to the Nearest Ten or Hundred

Label the multiples of 10 that surround each number.
Circle the nearest multiple of 10.



Label the multiples of 100 that surround each number.
Circle the nearest multiple of 100.



Test Prep

9 Leila bought a plane ticket for \$757. Will bought a plane ticket for \$473. How much more did Leila spend than Will?

- A. \$274
- B. \$284
- C. \$324
- D. \$1,230

10 Which is the next number in this pattern?

1, 3, 6, 10, 15, ■

- A. 16
- B. 17
- C. 20
- D. 21