


Finding Differences on the Number Line


For each subtraction sentence, draw jumps on the number line to help you find the difference.

1




$100 - 26 = \square$

2



$100 - 78 = \square$

3



$200 - 87 = \square$



Test Prep

- 4 There are 12 students in the writing club. Each student has a pen pal in another country. This year, each student will write 7 letters to their pen pal. How many letters will the writing club write to the pen pals this year? Explain how you found your answer.
