



# Finding Rules with Parts and Wholes

Complete the set of Find a Rule cards.

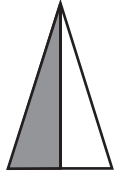
**1**

FRONT	BACK
	Rule A <u>2</u>
	Rule B <u>6</u>


**2**

FRONT	BACK
	Rule A      _____
	Rule B      _____

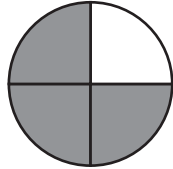
**3**

FRONT	BACK
	Rule A <u>1</u>
	Rule B      _____

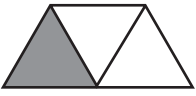
**4**

FRONT	BACK
	Rule A      _____
	Rule B <u>4</u>

**5**

FRONT	BACK
	Rule A      _____
	Rule B      _____

**6**

FRONT	BACK
	Rule A      _____
	Rule B <u>3</u>



## Test Prep

**7** Which is another way to write twelve thousand, eighty?

- A. 1,280                      C. 21,080  
B. 12,080                     D. 120,800

**8** Which is another way to write twenty thousand, one hundred three?

- A. 2,013                        C. 20,103  
B. 2,103                        D. 200,130