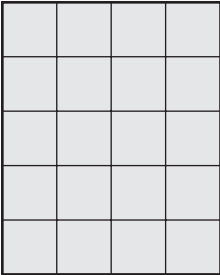

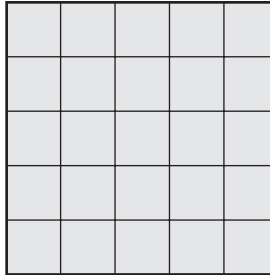


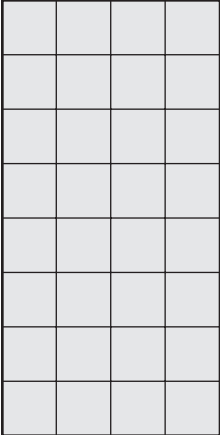
Multiplication Facts Practice

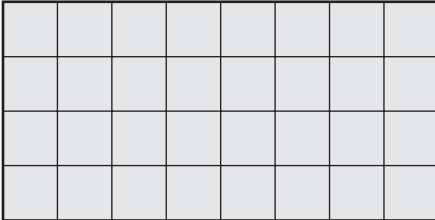
Find the total number of squares in the array.


1 

2 

3 

4 

5 

6 



Test Prep

7 What number makes this number sentence true?

$$13 \times \square = 13$$

- A. 0
- B. 1
- C. 10
- D. 13

8 Which digit is in the thousands place in the number 5,463?

- A. 3
- B. 4
- C. 5
- D. 6