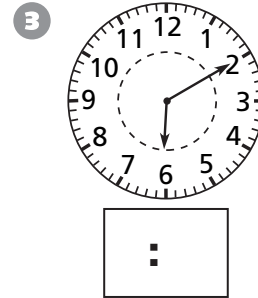

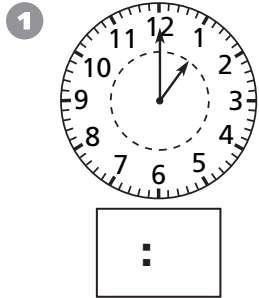



Comparing Times

What time is it?



Use the clock for each time.




Time shown 8:30 A.M.

40 minutes later will be _____ A.M.

1 hr 40 min earlier will be _____ A.M.

3 hr 40 min later will be _____ P.M.



Time shown 3:50 P.M.

30 minutes earlier will be _____ P.M.

2 hr 10 min later will be _____ P.M.

1 hr 15 min later will be _____ P.M.



Test Prep

- 6 The school stage is 42 inches high. A flagpole is set up on the stage. The flagpole is twice the height of the stage. How many inches is it from the bottom of the stage to the top of the flagpole? Explain how you know.
- _____