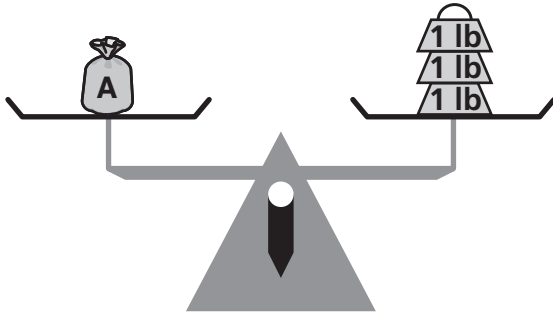


Weighing to Solve Problems

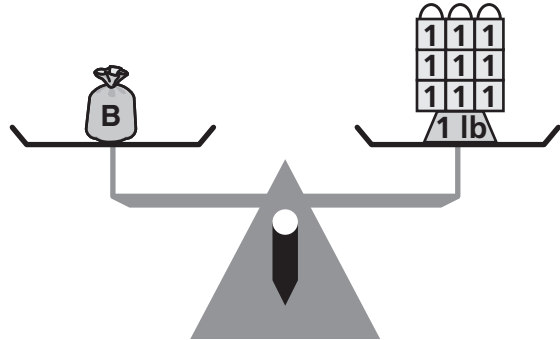
Find the weight of each bag.  weighs 1 pound and  weighs 1 ounce.

1



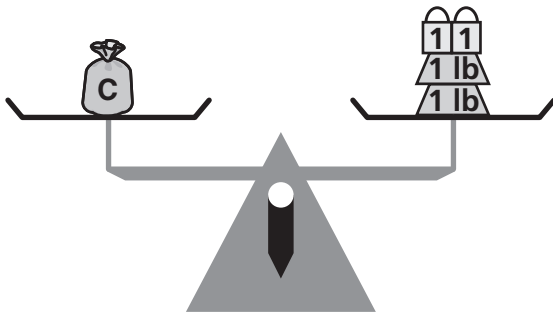
 weighs oz.

2



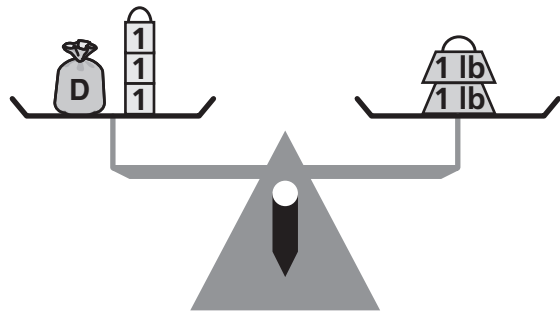
 weighs oz.

3



 weighs oz.

4



 weighs oz.



Test Prep

5 The thermometer shows the low temperature for one day in May. The high temperature for that day was 18°F warmer. What was the high temperature? Explain how you know.

