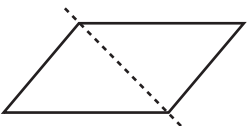
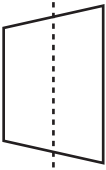
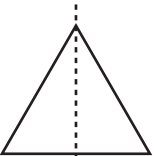
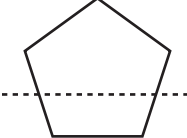



Solving Division Puzzles

- Jenny counted her steps as she walked up 7 floors. She counted 91 steps. How many steps are there for each floor?
- There are 52 weeks in a year. How many days are there in 52 weeks?
- Three notebooks cost \$1.17 (or 117¢). How much will 8 notebooks cost?
- The area of a rectangular field is 153 square yards. If one side of the field measures 9 yards, how many yards of fence do you need to go around the field?



Test Prep

- Which figure shows a line of symmetry?
A.  B. 
C.  D. 
- What is the length of the pencil to the nearest quarter inch?

A. 2 inches C. $2\frac{1}{2}$ inches
B. $2\frac{1}{4}$ inches D. $2\frac{3}{4}$ inches