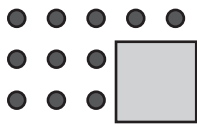
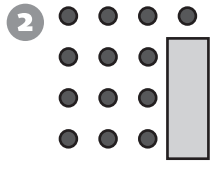
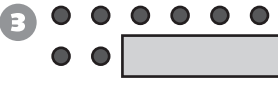
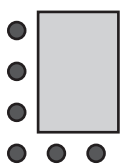
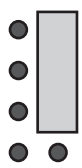
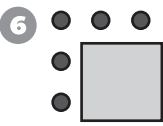


Algebra

For each array, some of the dots are hidden. Write the number of hidden dots.

<p>1</p>  <p>_____</p>	<p>2</p>  <p>_____</p>	<p>3</p>  <p>_____</p>
<p>4</p>  <p>_____</p>	<p>5</p>  <p>_____</p>	<p>6</p>  <p>_____</p>

Reasoning and Proof

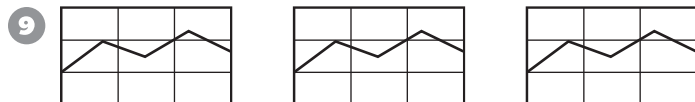
Write a number sentence that can be used to answer the question. Then answer the question.



These dogs are in the park. Some more dogs come to the park. Now there are 11 dogs. How many more dogs come to the park?



These are Brenda's CDs. Brenda gives some of her CDs to her sister. She has 7 left. How many CDs does she give to her sister?



For his math homework, Joseph has to make 4 more graphs. How many graphs does he have to make in all?

© Education Development Center, Inc.