

Measurement

Write the time shown on each clock. Use the words *before* and *after* to tell the time.


1



2




3




4



5



6



Number and Operations

Find the sum.

7 $7 + 6 =$

8 $9 + 8 =$

9 $12 + 5 =$

10 $4 + 11 =$

11 $8 + 10 =$

12 $7 + 12 =$

13 $13 + 7 =$

14 $15 + 6 =$
