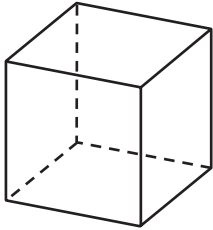


### Geometry

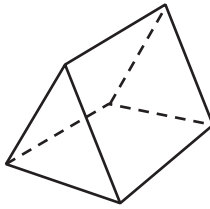
Write the number of faces for the three-dimensional figure.

1



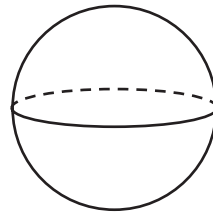
\_\_\_\_\_ faces

2



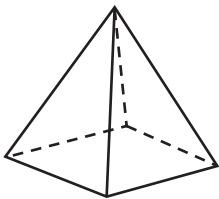
\_\_\_\_\_ faces

3



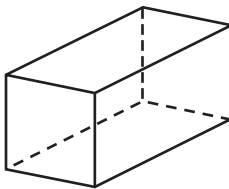
\_\_\_\_\_ faces

4



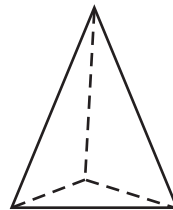
\_\_\_\_\_ faces

5



\_\_\_\_\_ faces

6



\_\_\_\_\_ faces

### Problem Solving

7 Write a story problem that can be solved by finding the sum of 27 and 12.

---

---

---

8 Write a story problem that can be solved by finding the difference between 34 and 22.

---

---