

Number and Operations

Find the missing numbers.

① 17, 18, 19, _____, 21, 22, 23, _____, 25, 26, _____, 28, 29, _____, _____,
_____, _____

② 44, 46, _____, _____, 52, 54, 56, _____, _____, _____, 64, 66, 68, _____,
_____, _____

③ 3, 6, 9, _____, 15, 18, _____, 24, _____, _____, 33, 36, _____, _____, 45,
_____, _____

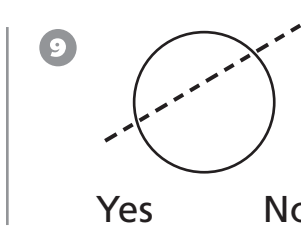
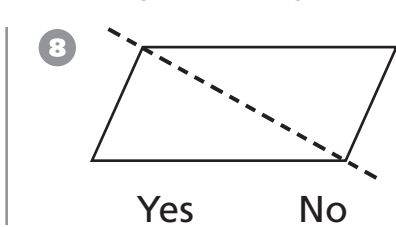
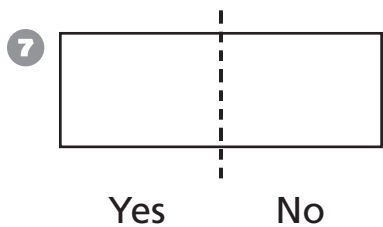
④ 6, 12, 18, _____, 30, _____, _____, 48, _____, 60, _____, 72

⑤ 10, 20, _____, 40, _____, _____, _____, _____, _____, _____

⑥ 130, 140, 150, _____, _____, 180, _____, 200, _____, _____, _____

Geometry

Is the dashed line a line of symmetry? Circle Yes or No.



Draw all the lines of symmetry for each figure. If there are no lines of symmetry, write *none*.

