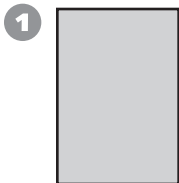



Geometry

Write the number of sides and corners for each figure.



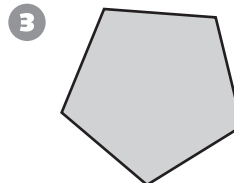
Sides _____

Corners _____



Sides _____

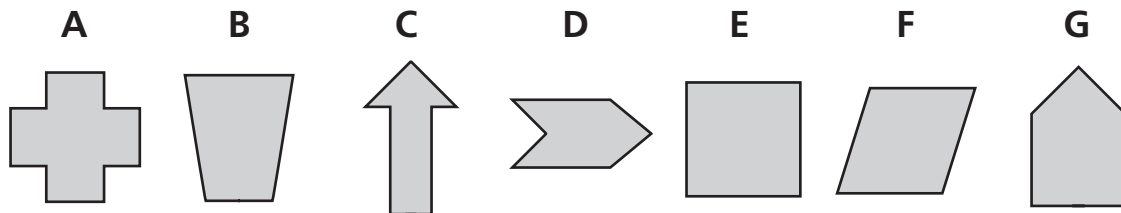
Corners _____



Sides _____

Corners _____

4 Sort the figures below into two groups by looking for ways the figures are alike. Write how you sorted the figures.



Problem Solving

Use the numbers 3, 7, and 10, to complete the problem.

5 Carmen is _____ years older than Jasmine. Carmen is _____ years old. Jasmine is _____ years old.