


Measurement

Circle the best estimate of the weight.

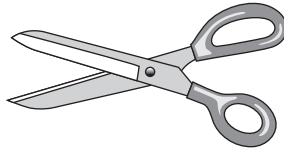
1 bicycle



25 oz

25 lb


2 scissors



2 oz

2 lb

3 washing machine



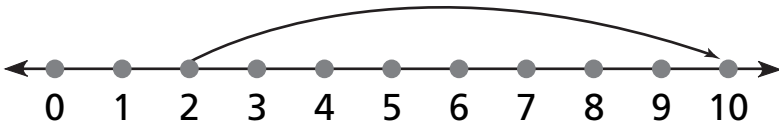
200 oz

200 lb

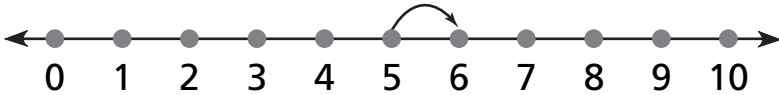
Number and Operations

Write the number sentence shown on each number line.

4



5



Problem Solving

Use a strategy and solve. Estimate and measure the length of the design.



Estimate: _____ inches

Measurement: _____ inches