

Geometry

Circle the best word.

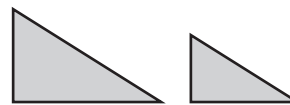
1



The figures are the same size and shape. They are _____.

congruent similar

2



The figures are the same shape. They are _____.

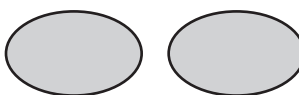
congruent similar

Tell whether the figures appear to be *congruent*, *similar*, *both*, or *neither*.

3



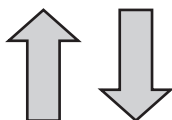
4




5



6



7



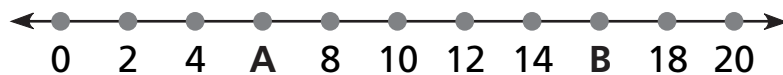
8



Number and Operations

Write the number for each letter.

9



A _____

B _____

10



C _____

D _____

E _____