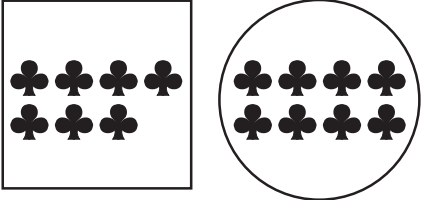


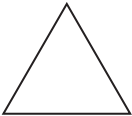


Reasoning and Proof


Find the number of items in each shape.
Write a number sentence and find the sum.



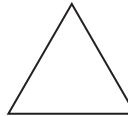
1



 +  = 

2




 +  = 

Problem Solving

Use a strategy and solve.

- 3 Lila can choose an apple or a pear for lunch. Each fruit can be red, yellow, or green. How many different fruits can she choose from?
- _____



Algebra

Write the missing numbers in the pattern

- 4 2, 4, 6, 8, 10, _____, 14, 16, _____, 20
- _____

- 5 5, 10, 15, 20, _____, 30, 35, 40, _____, 50
- _____

- 6 12, 15, 18, _____, 24, _____, 30, _____, 36, _____