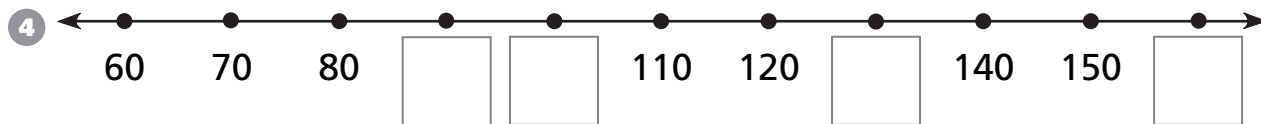
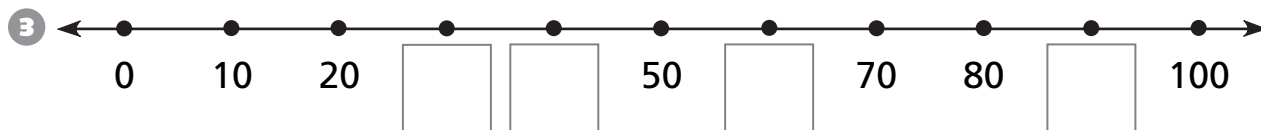
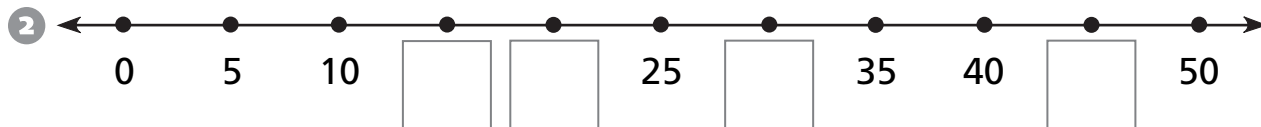
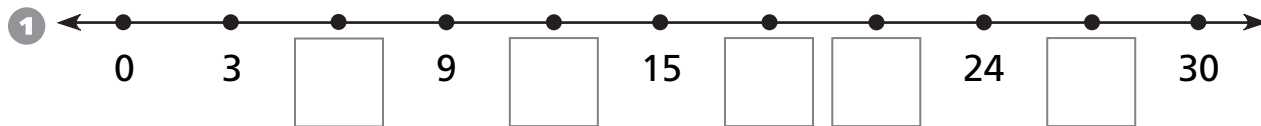


## Number and Operations

Fill in the missing numbers on the number line.



## Measurement

Choose the best unit to measure the length.

Write *inches*, *feet*, or *yards*.

5 length of a football field

\_\_\_\_\_

6 length of a sheet of paper

\_\_\_\_\_

7 height of a man

\_\_\_\_\_

8 length of a pet hamster

\_\_\_\_\_

9 length of the classroom

\_\_\_\_\_

10 height of a door

\_\_\_\_\_

11 height of a cat

\_\_\_\_\_

12 length of a bicycle

\_\_\_\_\_