




Number and Operations

Write a multiplication sentence to show the number of intersections.

<p>1</p>  <p>_____</p>	<p>2</p>  <p>_____</p>	<p>3</p>  <p>_____</p>
--	--	--

Every east-west road in a town intersects every north-south road. Find the number of north-south roads in the town.

- 4** There are 10 intersections and 2 east-west roads.
- 5** There are 12 intersections and 3 east-west roads.
- 6** There are 14 intersections and 2 east-west roads.

Data Analysis and Probability

For 7 and 8, use the line graph.

7 On which two days were the same number of students absent?

8 What was the largest number of students absent on one day? Which day was that?

