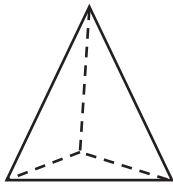
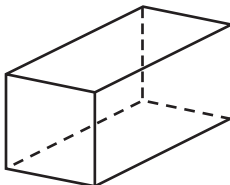
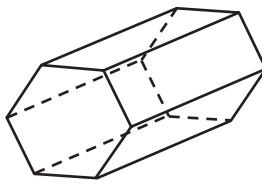
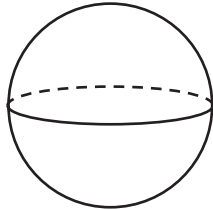
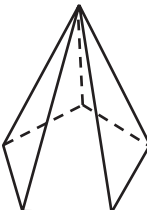
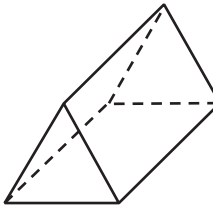
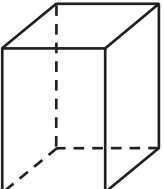
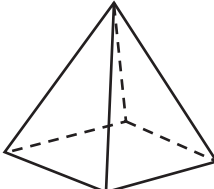



Geometry

Write the number of vertices for the three-dimensional figure.

<p>1</p>  <p><input type="text"/></p>	<p>2</p>  <p><input type="text"/></p>	<p>3</p>  <p><input type="text"/></p>
<p>4</p>  <p><input type="text"/></p>	<p>5</p>  <p><input type="text"/></p>	<p>6</p>  <p><input type="text"/></p>
<p>7</p>  <p><input type="text"/></p>	<p>8</p>  <p><input type="text"/></p>	<p>9</p>  <p><input type="text"/></p>

Reasoning and Proof

Solve the puzzle to find the mystery number.

10 I am less than 5×6 .
 I am a multiple of 4.
 My tens digit is 2 less than my ones digit. _____

11 I am greater than 8×4 .
 I am less than 5×10 .
 I am a multiple of 6.
 My tens digit is greater than my ones digit. _____