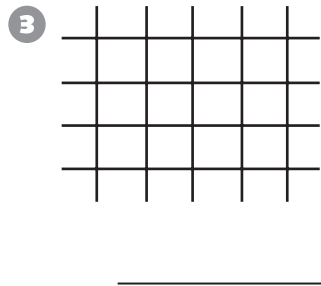
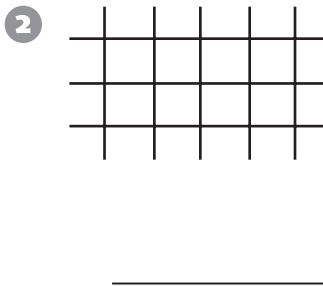
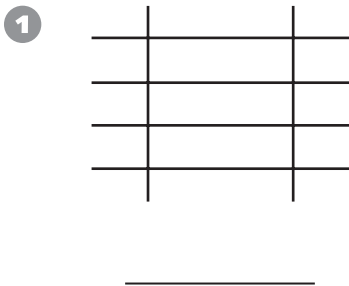


Number and Operations

Write a multiplication sentence for the number of intersections shown.



Draw all possible maps for the number of intersections shown.

4 12 intersections _____

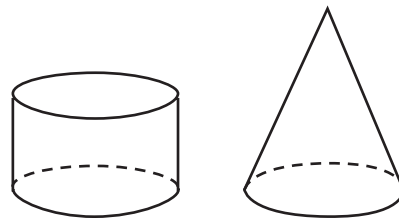
5 9 intersections _____

6 7 intersections _____

7 16 intersections _____

Geometry

Write *B* if the statement describes both figures. Write *N* if it does not describe either figure.



8 The figure has at least one flat surface.

9 The figure is made up of polygons.

10 The figure has no edges.