

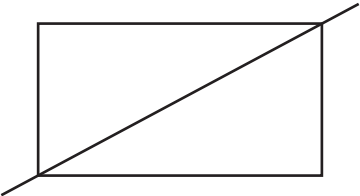

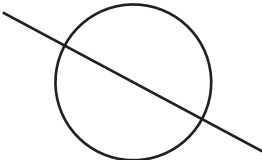

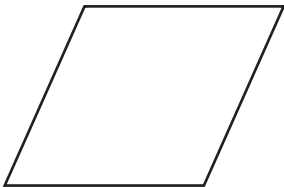
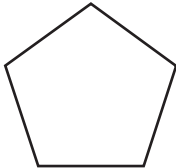



Geometry

Write **Yes** if the line is a line of symmetry.
Write **No** if it is not.





<p>1</p>  	<p>2</p>  	<p>3</p>  
--	--	--

Draw a line of symmetry for each shape.

<p>4</p> 	<p>5</p> 	<p>6</p> 
--	--	---

Measurement

Write the length of the line to the nearest centimeter.

<p>7</p> 	<p>_____</p>
<p>8</p> 	<p>_____</p>
<p>9</p> 	<p>_____</p>
<p>10</p> 	<p>_____</p>