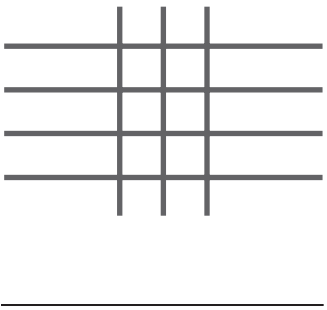
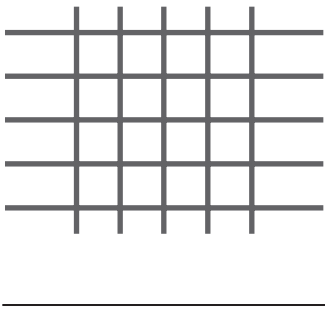
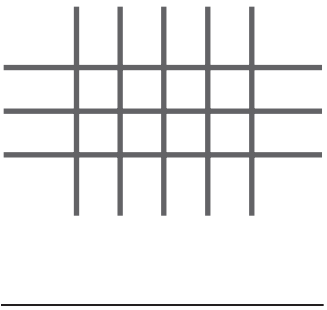
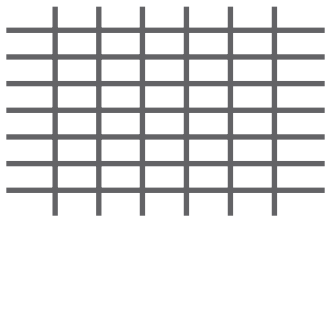

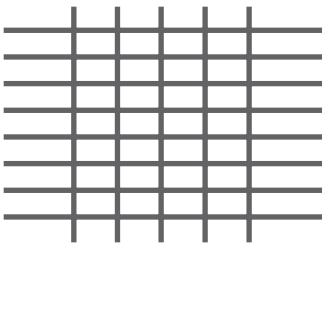


Number and Operations

Write the number of intersections.

<p>1</p>  <p>_____</p>	<p>2</p>  <p>_____</p>	<p>3</p>  <p>_____</p>
<p>4</p>  <p>_____</p>	<p>5</p>  <p>_____</p>	<p>6</p>  <p>_____</p>

Problem Solving

Use a strategy and solve.

7 Sara put one paper clip at each end of a string and one every 2 feet. The string was 10 feet long. How many paper clips did she use?

8 Andy, Sam, and Kara are in line at the movies. In how many different ways can they stand in line?

9 A carpenter cuts a board into 3 equal pieces. Then he cuts each piece in half. How many cuts does he make in all?
