







Algebra

Fill in the missing number to make a true number sentence.

1  + _____ = 

2  + _____ = 

3  + _____ = 

4 $2 + \underline{\quad} = 7$

5 $\underline{\quad} + 6 = 10$

6 $\underline{\quad} + 5 = 9$

7 $6 + \underline{\quad} = 9$

8 $8 + \underline{\quad} = 11$

9 $2 + \underline{\quad} = 9$

Geometry

Write the number of vertices.

