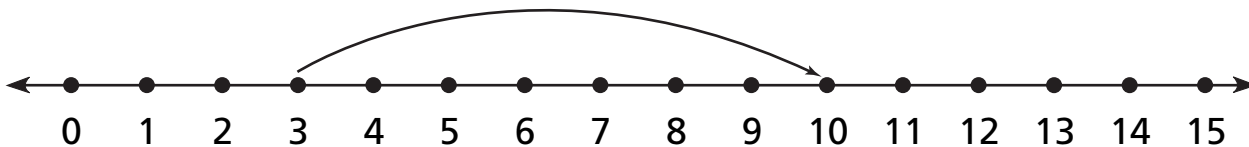


Number and Operations

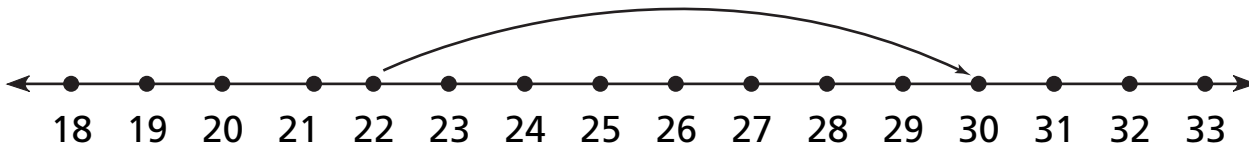
Use the number line to complete the number sentence.

1



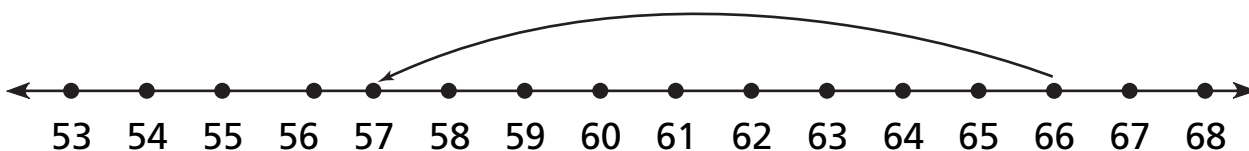
$3 + \underline{\quad} = 10$

2



$22 + \underline{\quad} = 30$

3



$66 - \underline{\quad} = 57$

Data Analysis and Probability

For 4 and 5, use the graph.

4 If Sam drove 3 miles, how many more miles would he have left to drive?

5 If Sam drove 6 miles, how many more miles would he have left to drive?

