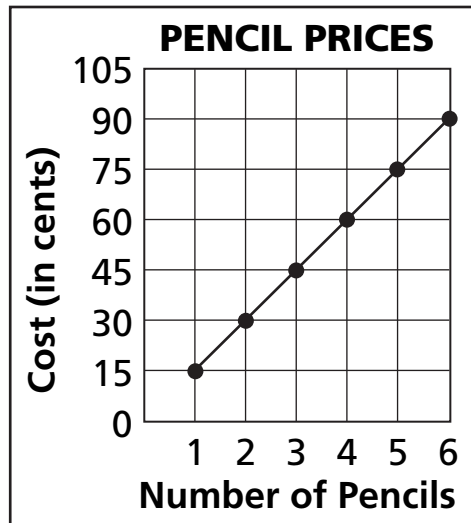


Algebra

For 1 to 4, use the graph.



- 1 How much does one pencil cost?

- 2 How many pencils can you buy for 30¢?


- 3 How much do 3 pencils cost?


- 4 What is the largest number of pencils you can buy for less than \$1?

Measurement

Write the total amount for each.







7 ounces

5 ounces