

Algebra

Complete the Find a Rule cards. Then name a rule.

1

FRONT	BACK
2	6
5	9
10	14
6	10
3	
9	
0	

2

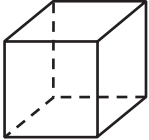
FRONT	BACK
2	8
5	20
4	16
6	24
1	
3	
9	

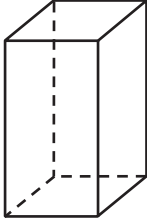
3

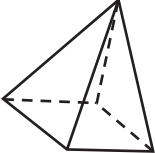
FRONT	BACK
♥♥♥	1
♥♥♥♥♥♥♥	4
♥♥♥♥	2
♥♥♥♥♥♥♥♥	5
♥♥♥♥♥	
♥♥	

Geometry

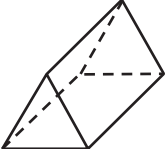
Write the number of faces in the figure for each shape.

4  _____ squares

5  _____ rectangles
_____ squares

6  _____ squares
_____ triangles

7  _____ rectangles

8  _____ triangles
_____ rectangles

9  _____ triangles