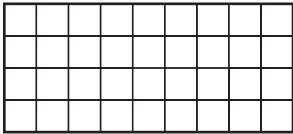
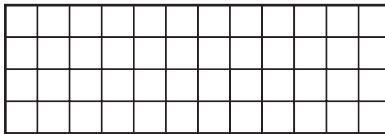




Number and Operations


Write the number of squares or dots in the array.

1 


2 

3 

4 

5 

6 

7 

Problem Solving

Use a strategy and solve.

- 8 The class is playing "Guess the Pattern." What are the next three numbers in this pattern?

5, 9, 13, 17, 21 . . . _____

- 9 Fun Shoes is having a sale. The first pair of shoes costs \$35. Each pair after that costs \$20. If a family buys 5 pairs of shoes, how much will they pay? _____